


Numele _____ Data _____

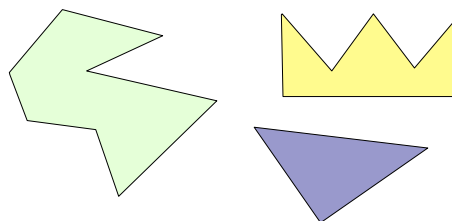
POLIGOANE



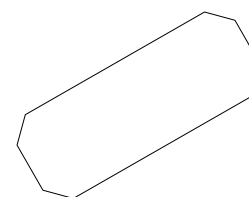
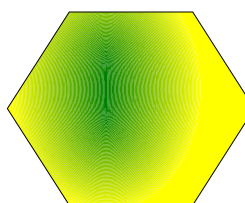
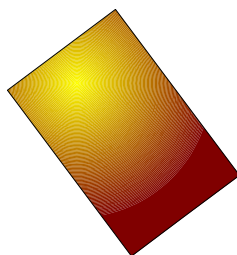
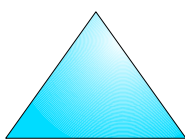
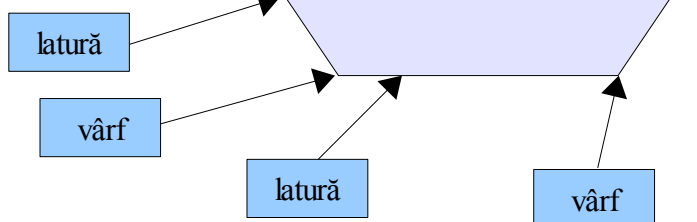
1

Notează în caiet și reține

Un **POLIGON** este o linie frântă închisă.

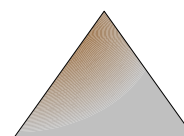


Segmentele liniei frânte sunt
LATURILE poligonului.

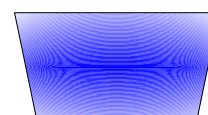


Toate aceste sunt poligoane.

Poligonul cu trei laturi se numește **TRIUNGHI**.

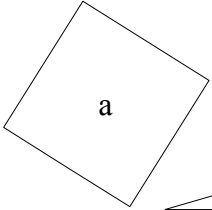
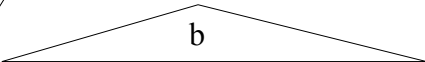
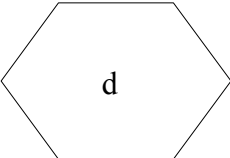
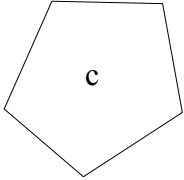
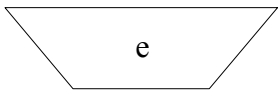
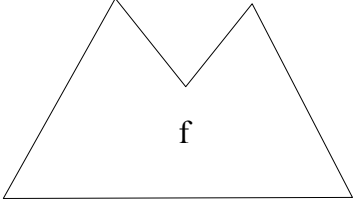
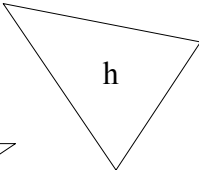

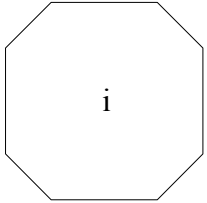

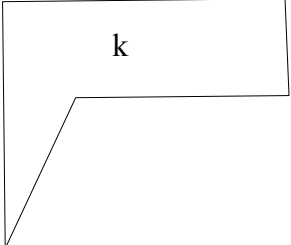


Poligonul cu patru laturi se numește **PATRULATER**.



2

Completează tabelul cu litera potrivită

Poligon cu 3 laturi	Poligon cu 4 laturi	Poligon cu 5 laturi	Poligon cu 6 laturi
			
			
			

3

Care dintre următoarele figuri geometrice sunt poligoane? Câte laturi are fiecare?

